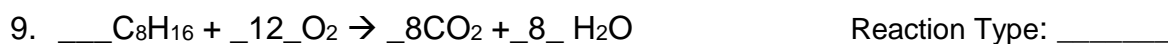
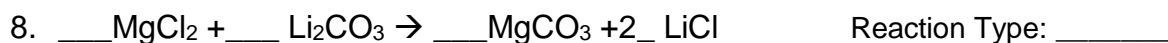
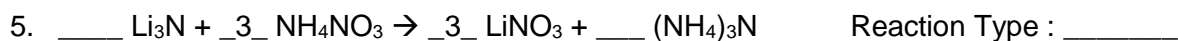

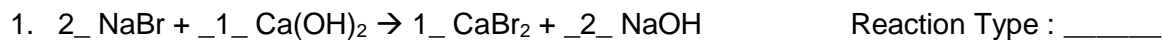


Types of Chemical Reaction Worksheet

Balance the reactions **1 to 6** and indicate which type of chemical reaction (synthesis, decomposition, single-displacement, double-displacement or combustion) is being represented:



Indicate which type of chemical reaction (synthesis, decomposition, single-displacement, double-displacement or combustion) is being represented in 7 to 20.

